




Level 2 **Addition Using Objects**
Unit 18.1 **Part I**

Time Taken: Total Score:




1. Count the objects and write the numbers in all.

a.




+ =

b.




+ =

c.

+ =

d.

+ =

Addition Using Objects Part I

2. Fill in the missing number.

a. $16 + 1 = \underline{\quad}$

e. $11 + \underline{\quad} = 12$

b. $14 + \underline{\quad} = 15$

f. $\underline{\quad} + 1 = 14$

c. $\underline{\quad} + 1 = 19$

g. $15 + 1 = \underline{\quad}$

d. $19 + 1 = \underline{\quad}$

h. $17 + \underline{\quad} = 18$

3. Solve the following problems.

i. One more than 18 is $\underline{\quad}$.

a. 18

b. 19

c. 20

d. 17

ii. Peter has 17 .

His friend gives him 1 more .

How many balloons does he have in all?

Peter has balloons in all.

$$17 + \square = \square$$

Extra